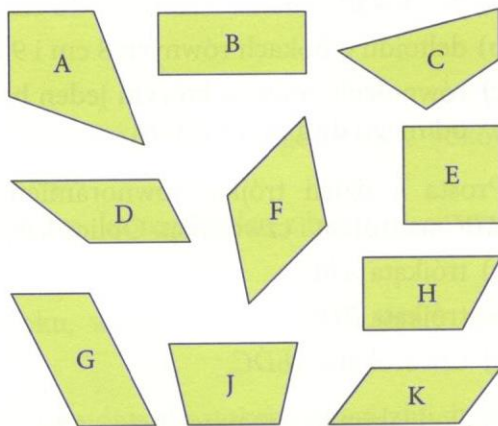


## 4.4 Czworokąty

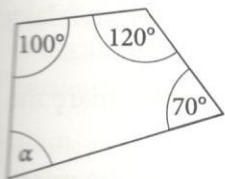
1 Która z figur obok jest:

- trapezem,
- trapezem równoramiennym,
- trapezem prostokątnym,
- rombem,
- kwadratem,
- prostokątem,
- równoległobokiem,
- deltoidem?

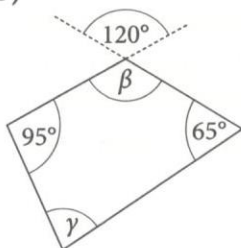


2 Oblicz kąty oznaczone literami greckimi.

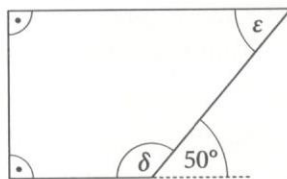
a)



b)

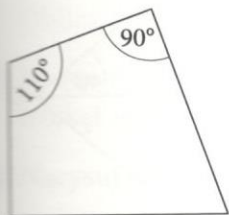


c)

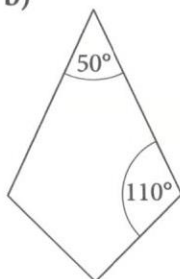


3 Oblicz miary pozostałych kątów deltoиду.

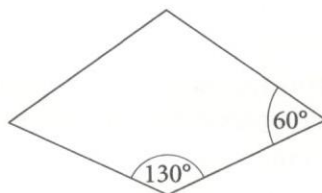
a)



b)

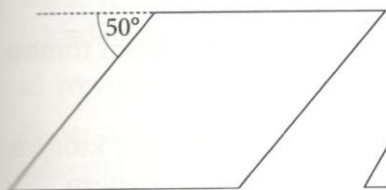


c)

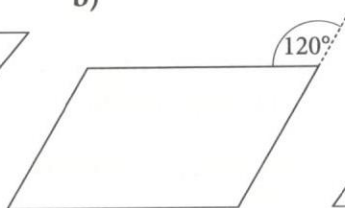


4 Oblicz miary kątów równoległoboku.

a)



b)



c)

